

Name: _____

Class: _____

Date: _____

TYPES OF ENERGY (A)

- Examine each of the following pictures.
- In the top box, write down whether it shows an example of kinetic energy (KE) or potential energy (PE). In the bottom box, write down the specific type(s) of energy that each object possesses.




a. **kinetic**

mechanical
sound



b.



c.



d.



e.



f.



g.



h.



i.

Name: _____

Class: _____

Date: _____

TYPES OF ENERGY (B)

- Below are pictures of household appliances. Each appliance uses electrical energy to work.
- Write down the different form(s) of energy produced **AFTER** the appliances are plugged in.



a. lamp

radiant E
thermal



b. blender



c. hair dryer




d. speaker




e. toaster



f. television



g. ceiling fan



h. stove



j. washing machine